


**EXERCISE BOOKLET  
STANDARD- 10<sup>TH</sup>**



**[www.saiphy.com](http://www.saiphy.com)**

 9664080155



Q. 4 A) Read the given map and answer the following questions:  
(Any Four)

4



- 1) The relative location of Telangana Plateau is in which part of the country?
- 2) Sapti, Ghagara, Gandak, Kosi are the tributaries of which river?
- 3) Which is the largest tributary of river Ganga?
- 4) In which state are the Garo Hills located?
- 5) Find out the highest mountain peak in India and write its name along with its height.

EXERCISE BOOKLET - GEOGRAPHY(ENGLISH MEDIUM) ♦ ♦ 5

Q. 4 B) Mark and name the following in the outline map given below and prepare an index. (Any Four) 4



- 1) Guyana Highlands
- 2) Brazilian Highlands
- 3) Cassino Beach
- 4) Marajo Island
- 5) Amazon river basin
- 6) Brasilia

**Q. 5 Give geographical reasons. (Any Two)**

**6**

- 1) There are differences between the east and west coast of India.
- 2) Agriculture is the main occupation followed in the Punjab Plains.
- 3) Extensive plains are rare in Brazil.
- 4) Most of the course of Amazon river is suitable for water transport.

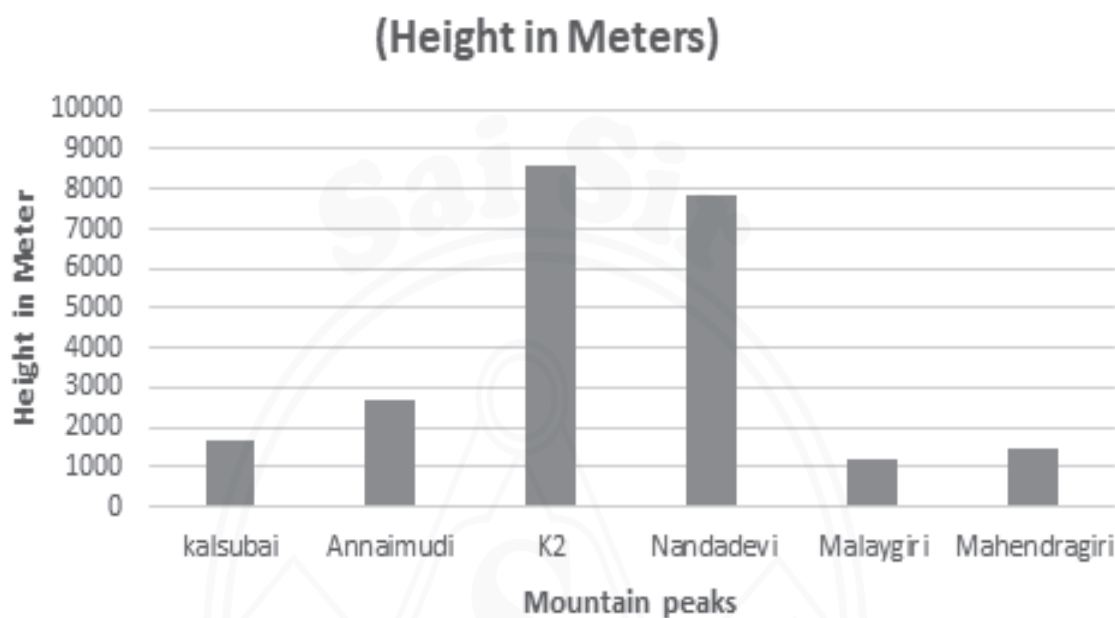
**Q. 6 A) In given map name any three rivers and show the direction of their flow.**

**6**



OR

Q.6 B) Observe the given graph and answer the following questions. 6

**India-Heights of major mountain peaks**

- 1) Name the mountain peaks in descending order.
- 2) Considering the highest and lowest mountain peak write the difference between their heights.
- 3) Name the mountain ranges in which these peaks are situated.

**Q. 7 Answer the following in brief. (Any Two)****8**

- 1) Write the factors that are taken in to account while writing a field visit report in sequential order.
- 2) What is the cause of acceleration of economic development in India?
- 3) Why are the coastal rivers of Brazil short-flowing?

\*\*\*

**GEOGRAPHY**  
**EXERCISE: 1.2**  
**TOPICS: 1, 2 & 3**

**Q.1 Tick  $\checkmark$  in the bracket against wrong option.**

**4**

1) For field visit following items are necessary to carry with.

- a) Camera.
- b) Knife.
- c) Map.
- d) Pen-Diary

2) Rivers of Brazilian drainage system.

- a) Sao Francisco
- b) Amazon
- c) Subarnarekha
- d) Uruguay

3) These are perennial rivers.

- a) Jhelum
- b) Shyok
- c) Ghagghar
- d) Beas

4) Following rivers in Brazil are north flowing.

- a) Paraguay
- b) Tocantins
- c) Aragua
- d) Xingu

**Q. 2 Identify the wrong pair and tick  $\checkmark$  in the bracket against it.** 4

1) Peak and their mountain range.

i) Malaygiri – Eastern Ghats

ii) Kanchenjunga – Middle Himalayas

iii) Kalsubai – Sahyadri/Western Ghat

iv) K2 – Zaskar

2) Tributaries of Ganga.

i. Son

ii. Ghagghar

iii. Beas

iv. Kosi

3) Identify the odd one.

i. Girnar

ii. Bundelkhand

iii. Nilgiri

iv. Anaimalai

4) Identify the odd one.

i. Negro

ii. Japura

iii. Marajo

iv. Sao Francisco

**Q. 3 Answer in one sentence. (Any Four)** 4

1) Which is the most ancient mountain system in Asia?

2) Which is the largest delta in the world?

3) In which country does the main part of Guyana Highlands lie?

4) What is the name of the capital of Brazil?

5) What type of islands are mainly found in Andaman and Nicobar Archipelago?

Q. 4 A) Mark and name the following in the outline map given below and prepare an index. ( Any Four) 4



- 1) The Great Indian Desert
- 2) Coromandel Coast
- 3) Maharashtra Plateau
- 4) Rann of Kachchh
- 5) Karnataka Plateau
- 6) Sahyadri

**Q.4 B) with the help of the given passage, find out the information from the map given below and write the answer of any four points. 4**

In Jammu and Kashmir, river Indus and her tributaries flow parallel to each other. Two large rivers flowing through the middle part of India are west-flowing rivers. Mountain ranges lying between these rivers are in the mid-part of India. A river originating in Mansarovar in Tibet flows east through China and enters India from east and drains in Bay of Bengal in the end. Brackish lake formed due to meteorite fall is located in Maharashtra. The archipelagos located to the east and west of India are part of India.



**Q. 5 Give geographical reasons. (Any Two)**

**6**

- 1) Brazilian Highland is also known as Brazilian shield.
- 2) West-flowing rivers are hardly found in Brazil.
- 3) The coastal areas of Brazil are famous for tourism.
- 4) In spite of abundant biodiversity there is limited development of tourism in Amazon basin.

**Q. 6 A) Identify the landforms in the map and name them. (Any Three) 6**

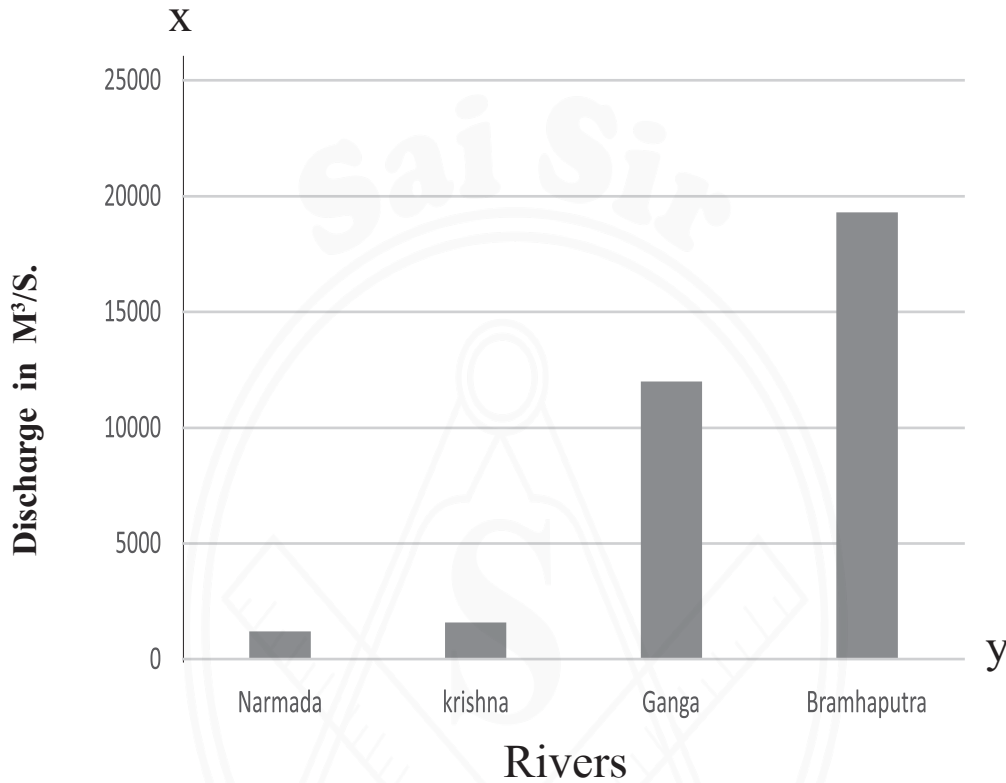


- |                     |                           |
|---------------------|---------------------------|
| i. Guyana Highlands | ii. Brazilian Highlands   |
| iii. Pantanal       | iv. Amazon river basin    |
| v. Marajo Island    | vi. The Great Escarpment. |

OR

Q. 6 B) Study the given Graph and answer the following. (Any Three)

### Discharge In Rivers



- 1) Which river has the lowest discharge?
- 2) How much is the discharge of river Brahmaputra?
- 3) How much is the discharge of river Krishna?
- 4) What is the difference between the highest and the lowest discharges?
- 5) Determine which of the above rivers might be perennial.
- 6) What could be the cause of regularity in discharge of rivers?

Q. 7 Explain the following. (Any Two)

8

- 1) Brazilian Highlands.
- 2) Himalayan rivers.
- 3) Pantanal region.

\*\*\*

**GEOGRAPHY****EXERCISE: 2.1****TOPICS: 4 & 5****Q. 1 Select an appropriate option:**

4

- a) The eastern coast of Brazil receives ..... type of rainfall.
- Cyclonic
  - Orographic
  - Convictional
  - Medium.
- b) India receives its maximum rainfall from the winds coming from..... direction.
- South-East.
  - South-West.
  - North-West.
  - North-East.
- c) Rainforests in Brazil are known as ‘Lungs of the World’, because..... .
- Evergreen forests produce oxygen on large scale.
  - These forests are huge in size.
  - In these forests, wildlife is found on very large scale.
  - There is very heavy rainfall in this region.
- d) Identify the proper group regarding wildlife in India.
- Lion, Nilgiri Tahr goat, Red Panda, Macau.
  - Lion, Tamarin, Bison, Puma.
  - Lion, Bison, Camel, One-horned rhino.
  - Lion, Leopard, Pink Dolphin, Yak.

**Q.2 Match the Pairs.**

4

- | ‘A’                   | ‘B’                     |
|-----------------------|-------------------------|
| 1) India              | a. Teak                 |
| 2) Brazil             | b. Amazon Basin         |
| 3) Deciduous forests  | c. Temperate climate    |
| 4) Coniferous forests | d. Monsoon climate      |
|                       | e. Himalayas            |
|                       | f. Hot/Tropical Climate |

**Q. 3 Answer the following in one sentence. (Any Four)**

**4**

- 1) Where does the rain shadow region of South India form?
- 2) Which is the rainy season in Brazil?
- 3) Area under which type of forests is most in India?
- 4) What types of forests are found in Brazilian Highland?
- 5) In which two seasons Rainfall occurs in India?

**Q. 4 A) Mark and name the following in the outline map given below and prepare Index. (Any Four)**

**4**



- 1) Largest Delta in the world.
- 2) Habitat of One-horned rhino.
- 3) Coniferous forests.
- 4) Habitat of Indian Bustard.
- 5) Wettest place in the world.
- 6) Hot desert region.

Q. 4 B) Read the given map and answer the following questions.

(Any Four)

4



- 1) Name the direction of wind coming towards Brazil.
- 2) Which is the region of low temperature in Brazil?
- 3) Distribution of which geographical factors is shown in this map?
- 4) What would be the nature of precipitation between  $0^{\circ}$  to  $5^{\circ}$  N and  $0^{\circ}$  to  $5^{\circ}$  S latitudes?
- 5) As per the winds shown in the map, what types of rainfall occurs in Brazil?

**Q. 5 Give geographical reasons. (Any Two)**

6

- 1) Distribution of precipitation is uneven in India.
- 2) There is no major change in annual range of temperature of Chennai.
- 3) Temperature decreases as one goes from north to south in Brazil.
- 4) Area under dense rainforest is more in Brazil.

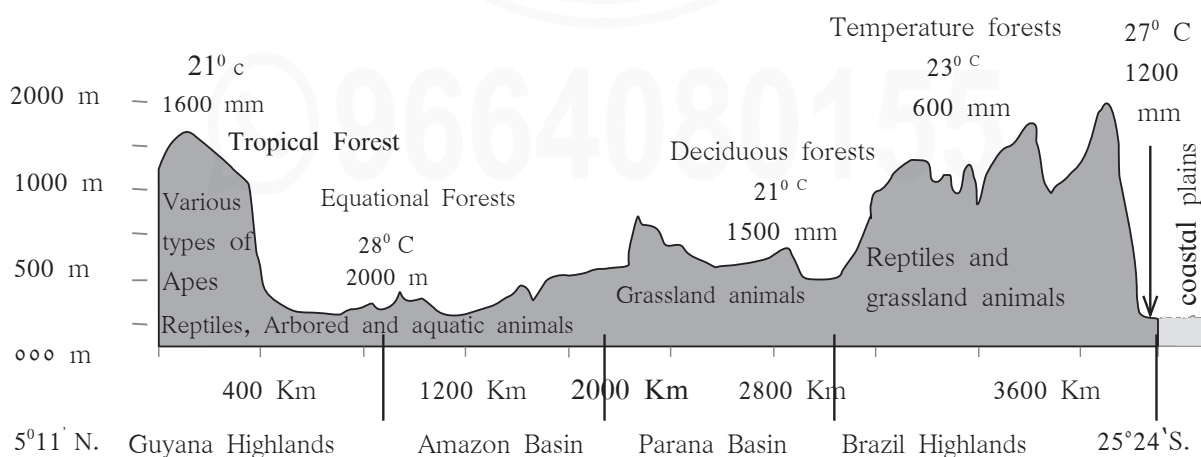
**Q.6 A) Represent the following statistical data with the help of a multiple line graph and answer the questions given below.**

6

Month	Temperature ( $^{\circ}\text{C}$ )	
	Delhi	Brasilia
June	34	22
July	32	23
August	31	26
September	30	25

- 1) Find out the difference in temperature of Delhi and Brasilia in the month of August.
- 2) In given period, which season would be there in Brazil?
- 3) In which month there is highest difference in temperature of Delhi and Brasilia?

OR

**Q. 6 B) Read/ Observe the following diagram and answer the questions given below.**

- 1) Where are the temperate forests found in Brazil?
- 2) Why are deciduous forests found in Paraguay- Parana river basin?
- 3) What types of animals are found in Guyana highland region?
- 4) What types of animal life would be there in Amazon River basin?
- 5) What is the mean rainfall in deciduous forests region?
- 6) In which region is the highest temperature found?

**Q. 7 Answer the following questions in detail. (Any Two) 8**

- 1) Compare the climatic conditions of India and Brazil on the basis of physiography and latitudinal location.
- 2) Write the monthwise different reasons found in India and write their characteristics in brief.
- 3) “There is diversity in wildlife in Brazil”. Explain with suitable examples.

\*\*\*

**GEOGRAPHY**  
**EXERCISE: 2.2**  
**TOPICS: 4 & 5**

**Q. 1 Select an appropriate option.**

**4**

- a) The western coast of India receives ..... type of rainfall.
- i. Convictional                      ii. Cyclonic  
iii. Orographic                      iv. snowfall
- b) North-West region of Brazil receives heavy rainfall, because .....
- i. This region is near to the Equator.  
ii. There are dense forests in this region.  
iii. This is mountainous region.  
iv. Cloud formation is very high in this region.
- c) The existence of ..... takes place on the leeward side of mountains.
- i. Grasslands                      ii. Rain-shadow region  
iii. Deserts                      iv. Dense forests
- d) Starting from your holidays after annual examination to next year's annual examination, identify the proper order of seasons in India.
- i. Rainy season – Winter – Retreat of Monsoon – Summer.  
ii. Winter – Retreat of Monsoon – Summer - Rainy season.  
iii. Summer – Rainy season – Retreat of Monsoon – Winter.  
iv. Retreat of Monsoon - Winter - Rainy season – Summer.

**Q.2 Match the Pairs.**

**4**

**'A'**

**'B'**

- |                   |                      |
|-------------------|----------------------|
| 1) Anaconda       | a. Deciduous forests |
| 2) Pau Brasil     | b. Dry region        |
| 3) Mangroves      | c. Swampy region     |
| 4) Indian Bustard | d. Evergreen forests |
|                   | e. River banks       |
|                   | f. Creeks            |

**Q. 3 Answer the following in one sentence. (Any Four)**

4

- 1) Where are the coniferous forests found in India?
- 2) Which is the period of rainy season in Brazil?
- 3) Which are the wettest places in India?
- 4) Name any four cities of India experiencing equable climate.
- 5) Where is the condor bird found in Brazil?

**Q. 4 A) Mark and name the following in the outline map given below and prepare an index. (Any Four)**

4

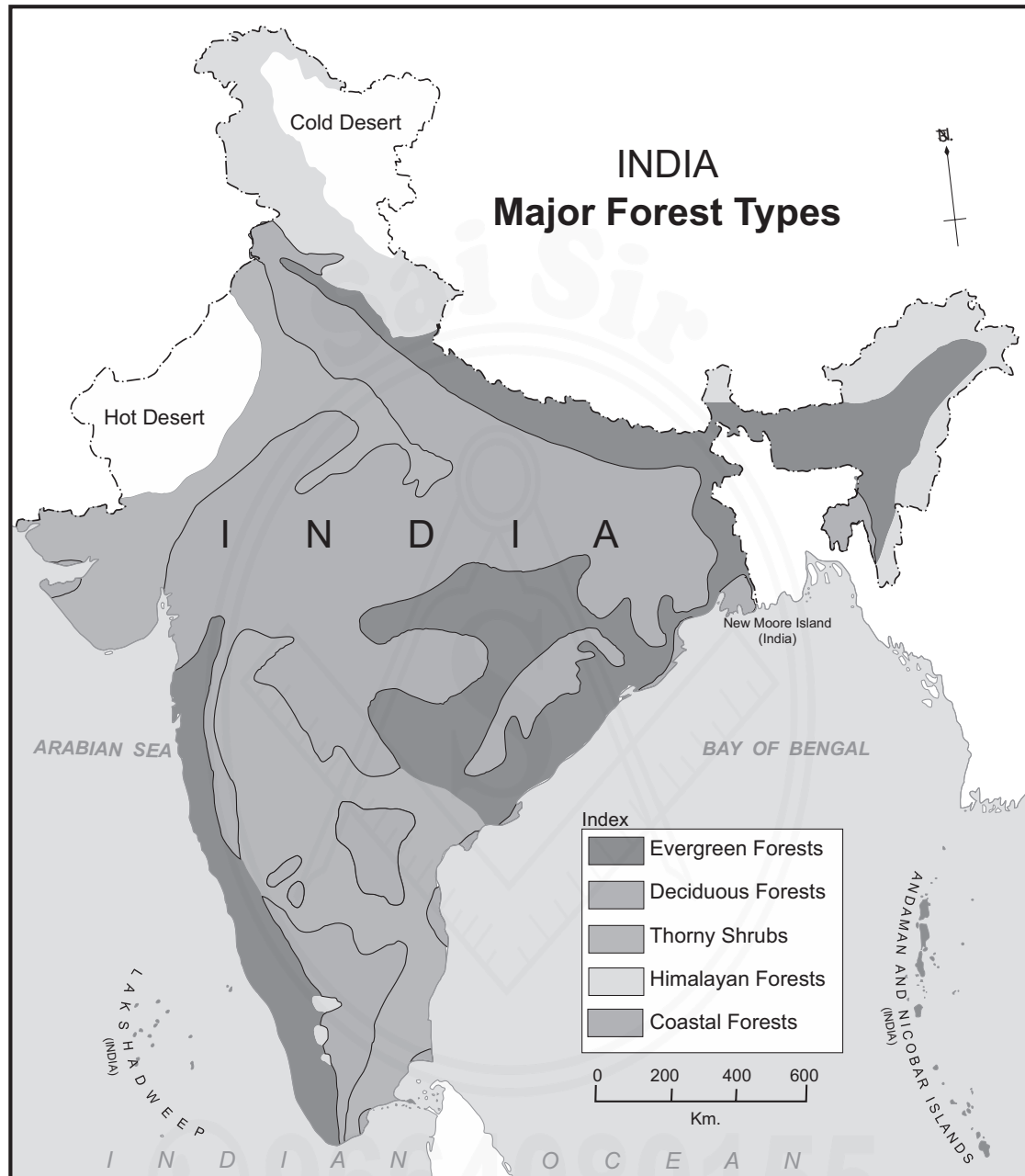


- 1) Caatinga (Thorny shrubs)
- 2) Temperate grassland.
- 3) Drought Quadrilateral.
- 4) Pantanal - swampy region.
- 5) Guyana Highland.
- 6) Marajo Island.

Q.4 B) Read the given map and answer the following questions.

(Any Four)

4



- 1) Which type of forests occupy maximum area in India?
- 2) Thorny shrub forests in Deccan Plateau are found in which states?
- 3) Write the names of any four regions having coastal forests?
- 4) Why could have cold desert formed in the northern region of India?
- 5) What type of forests are found in Andaman and Nicobar Islands?

**Q. 5 Give geographical reasons. (Any Two)**

**6**

- 1) Temperate climate is found in the Brazilian Highland.
- 2) Near equatorial regions in coastal areas of Brazil, there is no significant change in annual temperature.
- 3) The proportion of orographic rainfall is high in India.
- 4) Bio-diversity is found in the forests in India.

**Q.6 A) Represent the following statistical data with the help of a multiple bar graph and answer the questions given below.**

**6**

**(June to September) An Average Rainfall (In cm)**

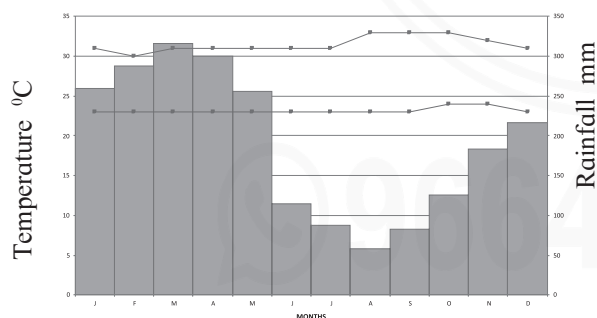
Month	June	July	August	September
Brazil	0.9	1.2	1.3	5.2
India	15.1	26.1	24.5	16.3

- 1) Which season is it in India?
- 2) Which season would be there in Brazil? Why?
- 3) In which months there is less rainfall in India and Brazil?

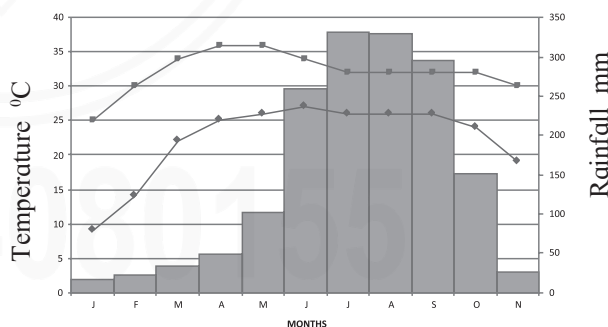
**OR**

**Q. 6 B) Read the following diagram and answer the questions given below.**

**Manaus**



**Kolkata**



- 1) In which month does the highest precipitation occur in Manaus?
- 2) In which month is the maximum range of temperature is found in given cities?
- 3) What is the lowest temperature shown in Kolkata?
- 4) What is the minimum precipitation at Manaus? In which month does it occur?
- 5) “Rainfall occurs throughout the year in Amazon Basin of Brazil”. Correlate this statement with reference to temperature and precipitation of Manaus.
- 6) Compare the climate of Kolkata and Manaus.

**Q. 7 Answer the following questions in detail. (Any Two)**

**8**

- 1) Explain with reasons the types of occupations that can flourish in Amazon basin.
- 2) Explain the correlation between climate and types of forests in India.
- 3) Write a comparative overview of types of forests in India and Brazil.

\*\*\*

**GEOGRAPHY****EXERCISE: 3.1****TOPICS: 6 & 7.****Q. 1 Select an appropriate option.****4**

- 1) Distribution of population depends on the following factors.
  - i. Process of development, agriculture, transportation.
  - ii. Climate, physiography, availability of water.
  - iii. Industries, transportation, settlement.
  - iv. Climate, availability of water, industries.
- 2) Population is sparse in Amazon Basin. because of ----- .
  - i. Dense forests and inhospitable climate.
  - ii. Agriculture and industrial development.
  - iii. Developing nation.
  - iv. Dry desert region.
- 3) Human settlements become sparse towards west in Amazon Basin. Which one of the following reason is not applicable for it?
  - i. Region is occupied by dense tropical forest.
  - ii. Equable and humid climate and abundant supply of water.
  - iii. Climate is inhospitable and it is not favourable for human settlements.
  - iv. Less and limited development of transportation.
- 4) Initial settlements in Brazil were established by imperialists arrived from ..... .
  - i. Africa
  - ii. America
  - iii. Europe
  - iv. India

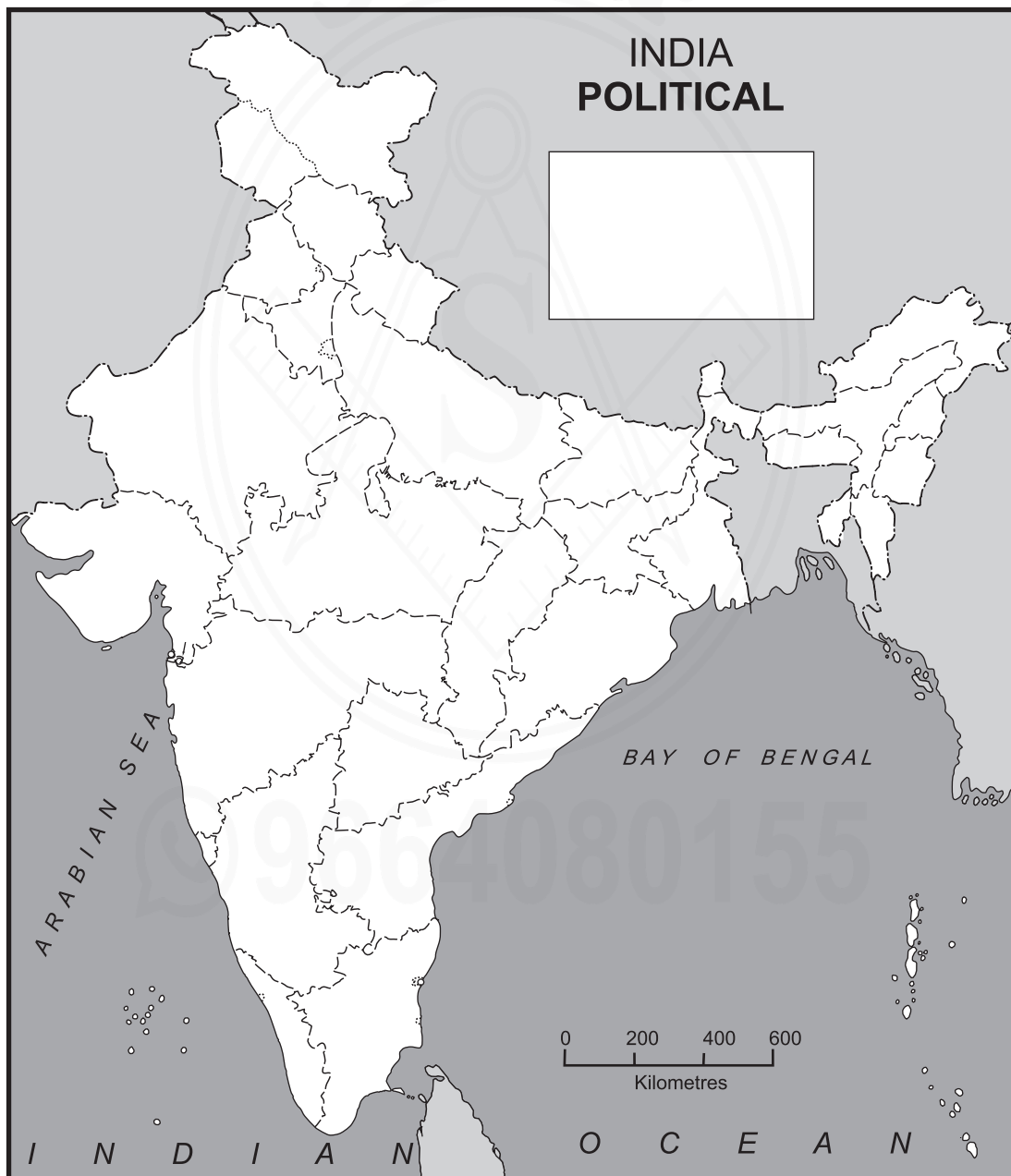
**Q.2 Match the Pairs.****4**

- | ‘A’                                | ‘B’              |
|------------------------------------|------------------|
| 1) Sparse Population               | 1. Chandigarh    |
| 2) Dense population                | 2. Goa           |
| 3) Compact settlement              | 3. Rajasthan     |
| 4) Fully urban settlement in India | 4. Uttar Pradesh |
|                                    | 5. Sao Paulo     |
|                                    | 6. Alagoas       |

**Q. 3 Answer the following question in one sentence. (Any Four) 4**

- 1) Which policy has been promoted by Brazilian Government?
- 2) Why is diversity in the pattern of settlements found in India?
- 3) What is the ranking of India in terms of population in the world?
- 4) How much percentage of world population lives in Brazil?
- 5) Why density of population is high in the eastern coast region of Brazil?

**Q. 4 A) With the help of given information, using appropriate method of distribution prepare a map with Index. (Any Four) 4**



State – Percentage of Urban Population.

- 1) Assam 0 to 20 %
- 2) Jharkhand 21 to 40 %
- 3) Tamil Nadu 41 to 60 %
- 4) Goa 61 to 80 %
- 5) Punjab 21 to 40 %
- 6) Mizoram 41 to 60 %

**Q.4 B) Read the given map and answer the following questions.**

**(Any Four)**

4



- 1) Name any two states having density less than 50.
- 2) Name any two states having density between 51 and 100.
- 3) In which class interval does the density of Alagoas state fall?
- 4) In which class interval does the density of Rio de Janeiro state fall?
- 5) What is the density of population of Acre State?

**Q. 5 Give geographical reasons. (Any Two)** **6**

- 1) As compared to Brazil India has higher working population.
- 2) Average life expectancy is increasing in India.
- 3) Number of literates are more in Brazil.
- 4) Human settlement is nucleated at Sao Paulo.

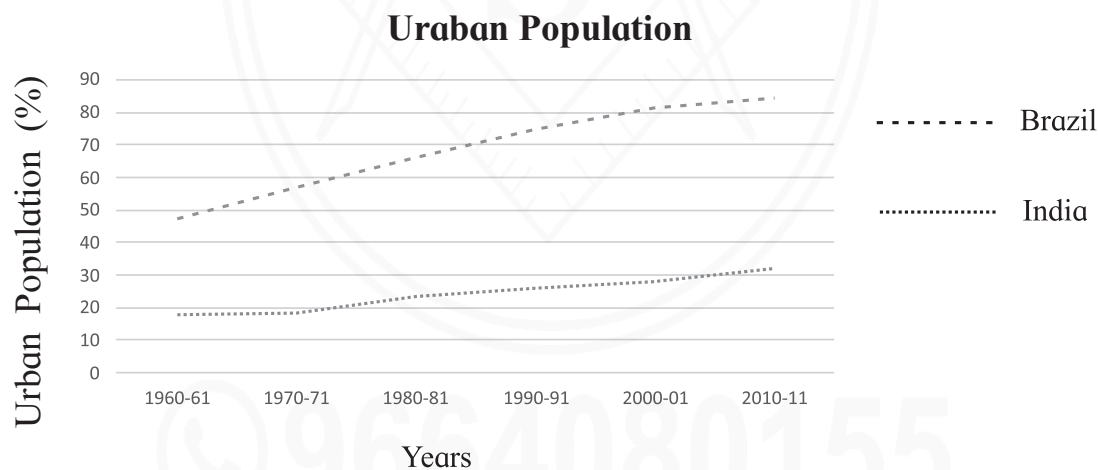
**Q. 6 A) Percentage of literacy rate of Brazil and India is given in the following table. With the help of this statistical data, prepare a bar graph and answer the questions given below.** **6**

Country	1991	2001	2011
Brazil	80.0	86.4	91.4
India	48.2	61.0	69.3

- 1) In which country there is remarkable increase in literacy rate after 1991?
- 2) Calculate the percentage of literacy rate of both the countries for the period of 1991 to 2001.
- 3) In which country is higher increase in literacy rate seen?

**OR**

**Q. 6 B) Read the following diagram and answer the questions given below.**



- 1) In which country urban population is higher?
- 2) In which country urban population is stable between 1960 and 1970?
- 3) What is the percentage of urban population of Brazil in 1990-91?
- 4) In which period the rate of urban population has increased in India?
- 5) In which period the rate of urban population has increased in Brazil?
- 6) Considering Brazil and India, which country has higher growth of urban population?

**Q.7 Answer the following questions in detail. (Any Two)****8**

- 1) Explain with example the effect of physical factors on the distribution of population in India.
- 2) Compare the human settlements of India and Brazil with the help of following points.
  - i) Physiography ii) Climate iii) Cultivable land iv) Major river basins.
- 3) Write in detail about the urbanisation in India and Brazil.

\*\*\*

**GEOGRAPHY****EXERCISE: 3.2****TOPICS: 6 & 7.****Q. 1 Identify correct correlation and make a link.**

4

Group 'A'	Group 'B'	Group 'C'
1) Rajasthan	1) Dense Population	1) Abundant reserves of minerals.
2) Uttar Pradesh	2) Sparse Population	2) Dry Desert region.
3) Sao Paulo	3) Low urban Population	3) Plain region
4) Para	4) High urban Population	4) Dense forests.

**Q.2 A) Identify the incorrect pair.**

2

- 1) i) Punjab – Sparse Population      ii) Kerala – Dense population  
     iii) Uttar Pradesh – Dense Population      iv) Himachal Pradesh - Sparse Population.
- 2) i) Para - Sparse Population      ii) Ceara - Dense Population  
     iii) Roraima - Dense Population      iv) Acre - Sparse Population

**B) Identify odd factor.**

2

- 1) Due to the following reasons human settlements are nucleated in the east coast of Brazil.  
 Odd factor \_\_\_\_\_ .  
 i. Fertile land  
 ii. Transportation facilities.  
 iii. Availability of resources.  
 iv. Inhospitable climate.
- 2) Due to the following reasons, population distribution is dense in the Northern Plain region of India.  
 Odd factor \_\_\_\_\_ .  
 i. Fertile land  
 ii. Better Transportation facilities.  
 iii. Industrial development.  
 iv. Limited agricultural development.

**Q. 3 State whether following statements are True or False and correct the false statements. (Any Four) 4**

- 1) Population distribution is even in Brazil.
- 2) India has less working population.
- 3) Dispersed settlements are found In east coast of India.
- 4) Amazon River basin is unfavourable for human settlements.
- 5) About 86 percent of population in Brazil lives in rural areas.

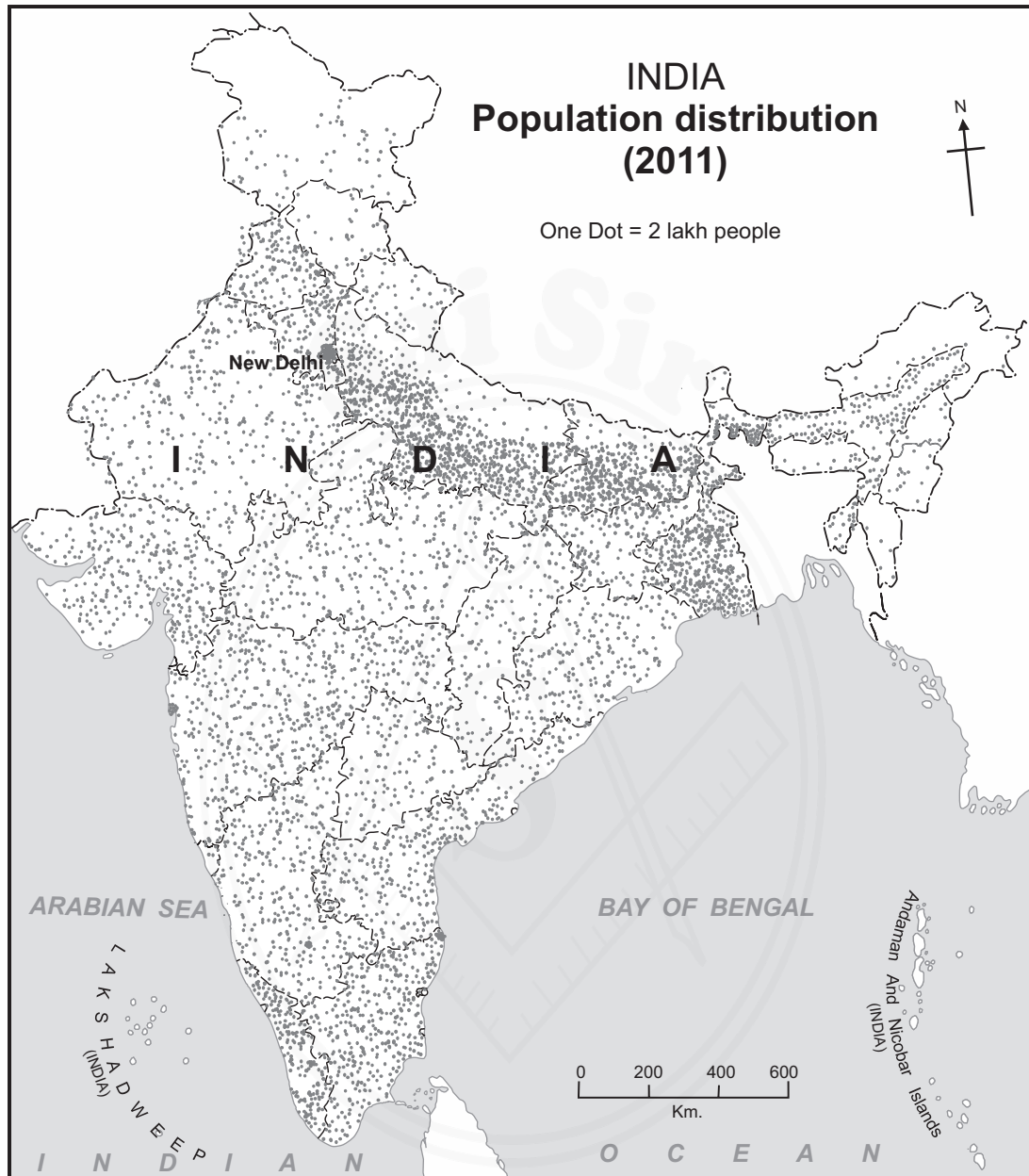
**Q.4 A) With the help of given information, using appropriate method of distribution, prepare a map with index. (Any Four) 4**



State – Percentage of Urban Population.

- 1) Para 51 to 60 %
- 2) Parana 81 to 90 %
- 3) Sao Paulo 91 to 100 %
- 4) Amazonas 71 to 80 %
- 5) Rio Grande do Norte 81 to 90 %
- 6) Bahia 61 to 70 %

Q.4 B) Read the given map and answer the following questions. (Four) 4



- 1) Name the state having high density of population in the eastern part of India.
- 2) Why density of population is high in Uttar Pradesh, Bihar and Kolkata?
- 3) Which coastal region of India indicates less distribution of population?
- 4) Why population distribution is sparse in Himachal Pradesh?
- 5) Why population distribution is less in North East India?

**Q. 5 Give geographical reasons. (Any Two)** **6**

- 1) Distribution of population is uneven in India.
- 2) In Brazilian Highland density of population is medium.
- 3) Population density is high in the coastal regions of Brazil.
- 4) The speed of urbanisation is slow in India.

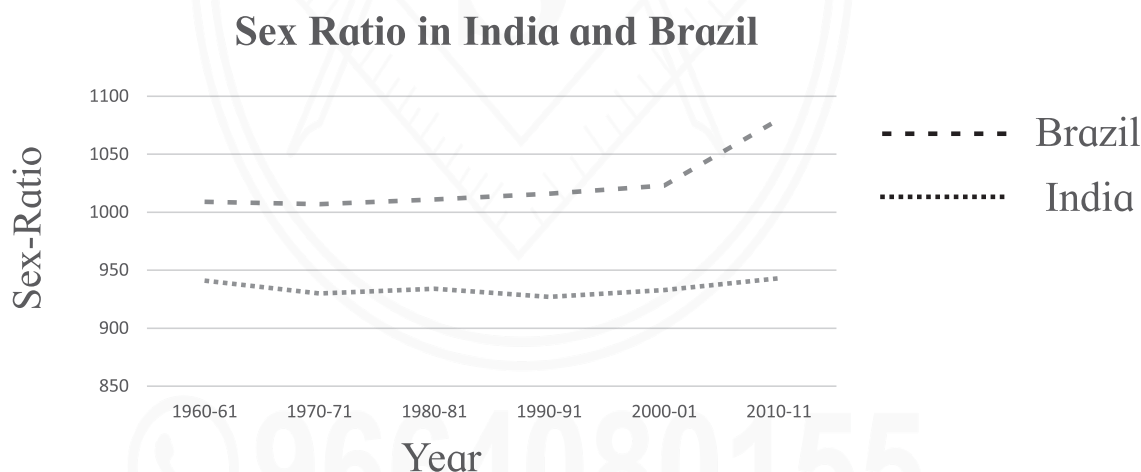
**Q. 6 A) Percentage of population Age-structure for Brazil and India is given in the following table. With the help of this statistics prepare a bargraph and answer the questions given below.** **6**

Country/ Age	0 -14	15 - 24	25 - 54	55 - 64	65 and above
Brazil	22.23 %	16.36 %	43.86 %	9.12 %	8.33 %
India	27.34 %	17.9 %	41.08 %	7.45 %	6.25 %

- 1) In which country percentage of working population is higher?
- 2) What is the percentage of working population in Brazil?
- 3) In which country percentage of dependant population is higher?

**OR**

**Q. 6 B) Read/Observe the following diagram and answer the questions given below.** **6**



- 1) In which country the male population is higher?
- 2) In which country number of females /aged are more?
- 3) In which country sex-ratio is low in 1960-61?
- 4) In which year sex-ratio is highest in Brazil?
- 5) In which year sex-ratio was highest in India?
- 6) Considering the graph of sex-ratio, state which country is a country of Youth and which country is declined towards old age?

**Q.7 Answer the following questions in detail. (Any Two)****8**

- 1) Differentiate between the structures of population in India and Brazil with the help of any four points given below.  
(Sex-ratio, Age and Sex composition, Growth rate of population, Life Expectancy, Literacy rate)
- 2) Explain the distribution of population in India and Brazil.
- 3) Explain the pattern of settlements in India and Brazil.

\*\*\*

**GEOGRAPHY****EXERCISE: 4.1**

Topics : 8 and 9

**Q. 1 Select an appropriate option and complete the following. 4**

- 1) Comparing with Brazil the per capita income of India is.....
  - i) low
  - ii) equal
  - iii) High
  - iv) Uneven.
- 2) In BRICS group country from ..... continent is not a member.
  - i) Asia
  - ii) North America
  - iii) Africa
  - iv) South America.
- 3) The cheapest mode of international transportation is .....
  - i) Railways
  - ii) Airways
  - iii) waterways
  - iv) Roadways
- 4) Due to vast longitudinal extent of the country, there are total ..... time zones in Brazil.
  - i) Three
  - ii) One
  - iii) Four
  - iv) Two.

**Q.2 Identify odd factor out. 4**

- 1) Porbandar, Kochi, Kandla, Karwar, Vishakhapatnam.
- 2) Brazil, India, South Africa, Japan, China.
- 3) Koyali, Digboi, Barauni, Mathura, Cuddapa.
- 4) GMT, RIAL, BRT, IST, UTC.

**Q.3 Answer the following question in one sentence. (Any Four) 4**

- 1) Which region in India is known as of minerals storehouse?
- 2) Which countries are the major business partners of Brazil?
- 3) The economy of any country depends on which factors?
- 4) In which part of Brazil has less development of transport network found?
- 5) Indian Standard Time (IST) is decided on the basis of the time of which longitude?

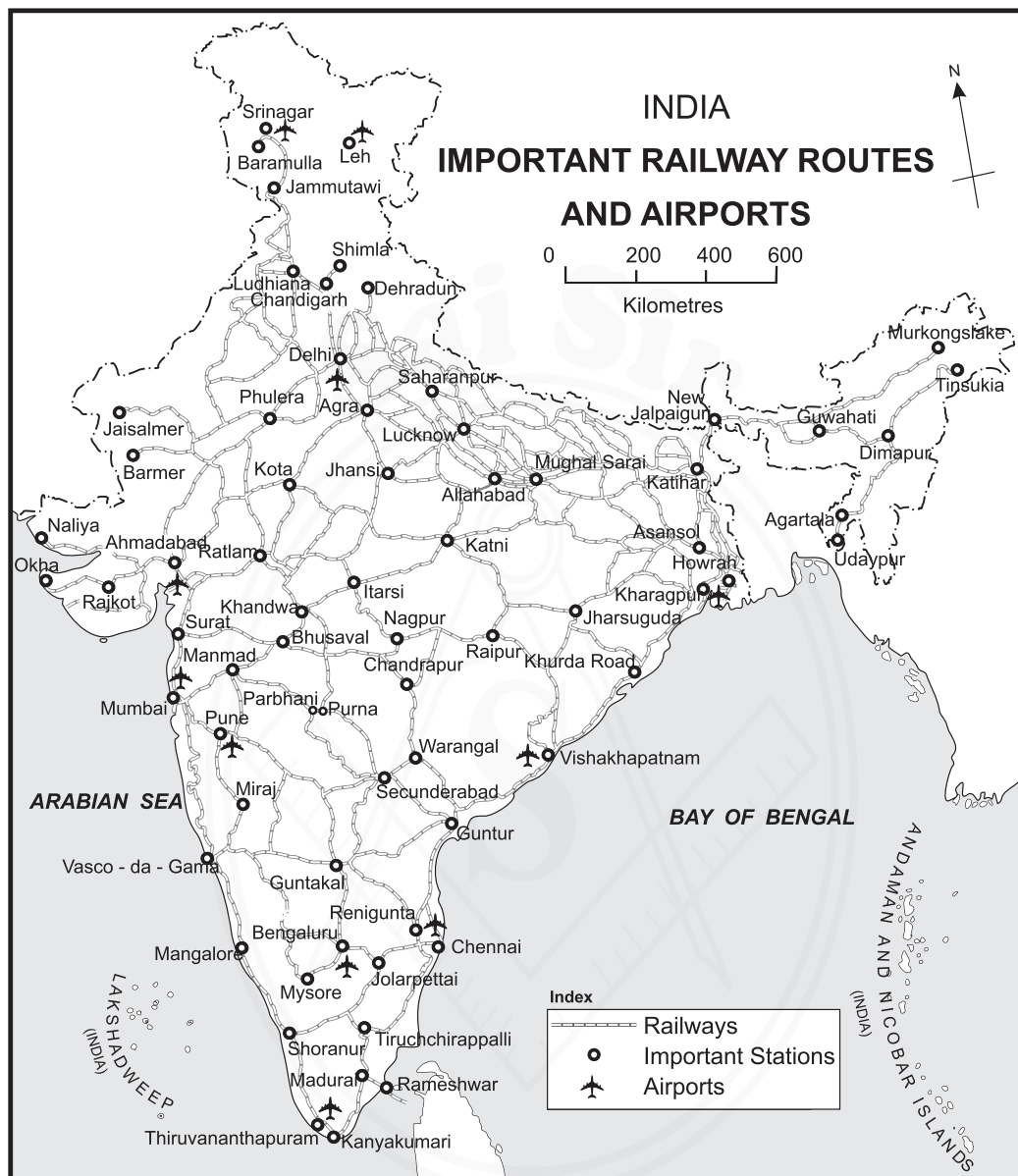
Q.4 A) In given outline map of Brazil show the distribution of any four crops produced in country with proper index.

4



Q. 4 B) Read the given map and answer the following questions.

4



- 1) Name any two major domestic airports in the country.
- 2) Which are the two major stations (Junctions) on Delhi to Kolkata railway route?
- 3) In which part of the country, railway network is sparse?
- 4) Which one of the following railway route is the shortest route? How much?  
Mumbai – Pune – Wadi – Guntakal – Chennai.  
Mumbai – Pune – Miraj – Guntakal – Chennai.
- 5) Which four major cities of India handle International Air Transportation?

**Q. 5 Give geographical reasons. (Any Two)**

**6**

- 1) India and Brazil are developing countries.
- 2) Centralization of large scale industries in Brazil is in South and South East region.
- 3) Water transportation is practiced in Amazon River.
- 4) Eco-tourism is developing in Brazil.

**Q. 6 A) Draw a Pie chart, indicating percentage of population**

**in different activities in Brazil and answer the following questions 6**

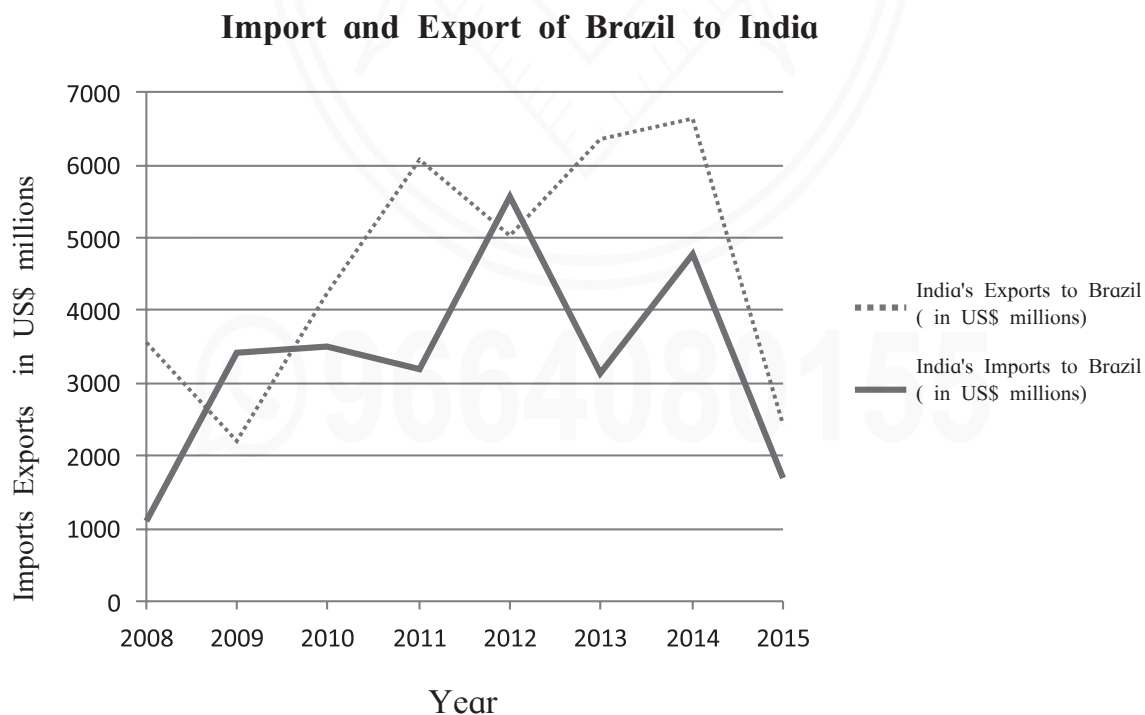
Activities/ Occupation	Percentage
Primary	20
Secondary	19
Tertiary	71

- 1) Which occupation has the highest percentage? How much?
- 2) Considering the percentage of all the types of occupations- in which category would this country lie?

**OR**

**Q.6 B) Read the following diagram indicating import and export between Brazil and India and answer the questions given below.**

**6**



- 1) The graph is for which years and how many?
- 2) In which year value of import from Brazil to India is more than the value of export to Brazil from India?
- 3) Discuss the Balance of Trade in the year 2013.
- 4) In which year India's trade with Brazil was about 6,000 US dollar?
- 5) In which year the difference in the value of trade is highest between India and Brazil?
- 6) What change is noticed in the trade of the year 2009 and 2012?

**Q. 7 Explain the following statements. (Any Two)**

**8**

- 1) The economies of India and Brazil are mixed type.
- 2) Fishing plays an important role in the economy of India.
- 3) The development of means of transportation is an indicator of progress of nation.

\*\*\*

**EXERCISE: 4.2****Q. 1 Select an appropriate option and complete the following. 4**

- 1) Brazil is leading country in the export of.....
  - i) Banana
  - ii) Soya bean
  - iii) Cotton
  - iv) Maize
- 2) The warm and cold ocean currents flow off the ..... coast of Brazil.
  - i) South
  - ii) East
  - iii) West
  - iv) North.
- 3) In Brazil..... tourism is developing.
  - i) Eco
  - ii) Historical
  - iii) Cultural
  - iv) Medicinal
- 4) In Brazil ..... is the most common mode of transportation.
  - i) Roadways
  - ii) Railways
  - iii) Airways
  - iv) Waterways

**Q. 2 Match the Pairs. 4****‘A’**

- 1) Nascente do Rio Moa
- 2) Ponta do Seixas
- 3) Allahabad
- 4) Mumbai High

**‘B’**

- a. Uttar Pradesh
- b. Mineral oil
- c. Stone Mines
- d. Acra
- e. Paraiba
- f. Swampy land

**Q.3 Answer the following question in one sentence. (Any Four) 4**

- 1) What are the different types of fishing in India?
- 2) In which states of India salt is produced on a large scale?
- 3) Name the member countries of BRICS.
- 4) Which factors have influenced the development of transportation service in Brazil?
- 5) In which part of Brazil the density of roadways is less?

Q.4 A) Mark and name the following in the outline map given below and prepare an index. (Any Four) 4



- 1) Fishing zone in Brazil
- 2) Ocean currents
- 3) Iron ore producing region
- 4) Coal producing region.
- 5) Brasilia
- 6) Major Inland Port.



**Q.5 Give geographical reasons. (Any Two) 6**

- 1) About 95 percent of international trade of India is practiced through water ways.
- 2) Railway transportation is confined to south-east region of Brazil.
- 3) Metallurgical industries are located in North eastern part of peninsular India.
- 4) Fishing is not developed in the interior part of Brazil.

**Q. 6 A) Draw a bar graph with the help of following information and write a note on it. 6**

**Percentage of Population engaged in Tourism and  
Contribution of Tourism in GNP.**

Country	Population	GNP (%)
India	9.5	8.3
Brazil	7.8	8.8

- Write a short note on the basis of the population in Tourism and it's contribution in GNP. in both countries.

**OR**

**B) Study the graph and answer the questions given below. 6**

**Number of International Tourists**



- 1) From which year number of foreign tourist has increased in India?
- 2) Why are the number of tourists stable in last 20 years in Brazil?
- 3) In which five year plan the number of international tourists has increased remarkably?
- 4) What was the number of tourists in both the countries in 1995?
- 5) Why could have international tourist increased in India?
- 6) In which year number of international tourists are more or less same in Brazil and India?

**Q. 7 Answer in detail. (Any Two)**

**8**

- 1) Why Brazil has four Time zones?
- 2) Write a note on import and export in India.
- 3) Why is the development of mining activity limited in Brazil?

\*\*\*

  
9664080155